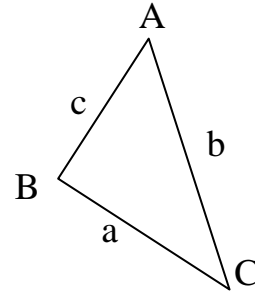


Day 5 – The Cosine Law

The **Cosine Law** relates sides and angles in a triangle in the following way:

$$\begin{aligned}a^2 &= b^2 + c^2 - 2bc(\cos A) \\b^2 &= a^2 + c^2 - 2ac(\cos B) \\c^2 &= a^2 + b^2 - 2ab(\cos C)\end{aligned}$$

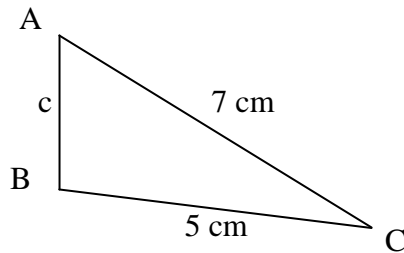


The Cosine Law can be used **only when you know**

1. 2 sides and the contained angle
2. all 3 sides

Using the Cosine Law to Find a Side

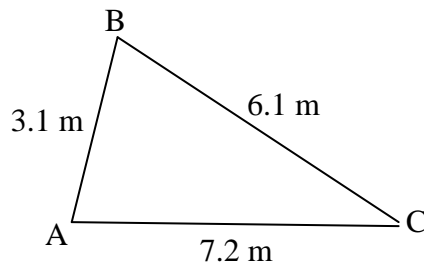
Example: Given $\triangle ABC$, find the length of the missing side, to one decimal place.



$$\begin{aligned}c^2 &= a^2 + b^2 - 2ab(\cos C) \\c^2 &= 5^2 + 7^2 - 2(5)(7)(\cos 43) \\c^2 &= 25 + 49 - 70 \cos 43 \\c^2 &= 74 - 70 \cos 43 \\c^2 &\cong 22.8 \\c &\cong \sqrt{22.8} \\c &\cong 4.8\text{cm}\end{aligned}$$

Using the Cosine Law to Find an Angle

Example: Given $\triangle ABC$, find $\angle A$, to the nearest degree.

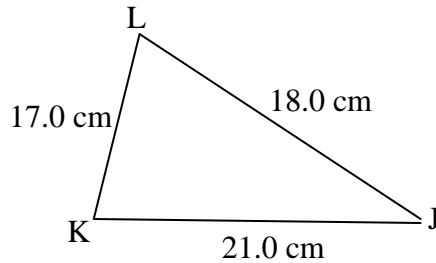


$$\begin{aligned}a^2 &= b^2 + c^2 - 2bc(\cos A) \\6.1^2 &= 7.2^2 + 3.1^2 - 2(7.2)(3.1)(\cos A) \\37.21 &= 51.84 + 9.61 - 44.64 \cos A \\37.21 &= 61.45 - 44.64 \cos A \\\cos A &= \frac{37.21 - 61.45}{-44.64} \\\angle A &= \cos^{-1}\left(\frac{-24.24}{-44.64}\right) \\\angle A &\cong 57^\circ\end{aligned}$$

Using the Cosine Law to Solve a Triangle

Example: Sketch and solve each triangle. Round your answers to the nearest degree and to the nearest tenth of a centimeter.

a) $\triangle JKL$, with $j = 17.0\text{cm}$, $k = 18.0\text{cm}$ and $l = 21.0\text{cm}$.



Find $\angle J$.

$$j^2 = k^2 + l^2 - 2kl(\cos J)$$

$$17.0^2 = 18.0^2 + 21.0^2 - 2(18.0)(21.0)(\cos J)$$

$$289 = 324 + 441 - 756 \cos J$$

$$289 = 765 - 756 \cos J$$

$$\cos J = \frac{289 - 765}{-756}$$

$$\angle J = \cos^{-1}\left(\frac{-476}{-756}\right)$$

$$\angle J \cong 51^\circ$$

Find $\angle K$.

$$k^2 = j^2 + l^2 - 2jl(\cos K)$$

$$18.0^2 = 17.0^2 + 21.0^2 - 2(17.0)(21.0)(\cos K)$$

$$324 = 289 + 441 - 714 \cos K$$

$$324 = 730 - 714 \cos K$$

$$\cos K = \frac{324 - 730}{-714}$$

$$\angle K = \cos^{-1}\left(\frac{-406}{-714}\right)$$

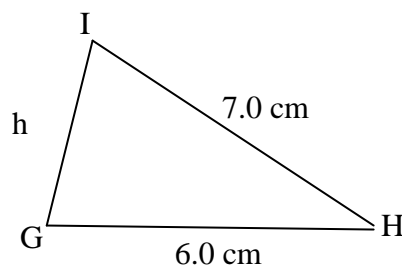
$$\angle K \cong 55^\circ$$

Find $\angle L$.

$$\angle L \cong 180^\circ - 51^\circ - 55^\circ$$

$$\angle L \cong 74^\circ$$

b) $\triangle GHI$, with $\angle H = 43^\circ$, $g = 7.0\text{cm}$ and $i = 6.0\text{cm}$.



Find h .

$$h^2 = g^2 + i^2 - 2gi(\cos H)$$

$$h^2 = 7^2 + 6^2 - 2(7)(6)(\cos 43^\circ)$$

$$h^2 = 49 + 36 - 84 \cos 43$$

$$h^2 = 85 - 84 \cos 43$$

$$h^2 \cong 23.6$$

$$h \cong \sqrt{23.6}$$

$$h \cong 4.9\text{cm}$$

After finding side h , $\triangle GHI$ can be solved using the sine law or cosine law.

Using Sin Law:

Find $\angle G$.

$$\frac{h}{\sin H} = \frac{g}{\sin G}$$

$$\frac{4.9}{\sin 43} \cong \frac{7.0}{\sin G}$$

$$4.9 \sin G \cong 7.0 \sin 43$$

$$\sin G \cong \frac{7 \sin 43}{4.9}$$

$$\angle G \cong \sin^{-1}\left(\frac{7 \sin 43}{4.9}\right)$$

$$\angle G \cong 80^\circ$$

Find $\angle I$.

$$\angle I \cong 180^\circ - 43^\circ - 80^\circ$$

$$\angle I \cong 57^\circ$$

Using Cos Law:

Find $\angle G$.

$$g^2 = h^2 + i^2 - 2hi(\cos G)$$

$$7.0^2 = 4.9^2 + 6.0^2 - 2(4.9)(6.0)(\cos G)$$

$$49 \cong 23.6 + 36 - 58.3 \cos G$$

$$\cos G \cong \frac{49 - 23.6 - 36}{-58.3}$$

$$\cos G \cong \frac{-10.6}{-58.3}$$

$$\angle G \cong \cos^{-1}\left(\frac{-10.6}{-58.3}\right)$$

$$\angle G \cong 80^\circ$$

Find $\angle I$.

$$\angle I \cong 180^\circ - 43^\circ - 80^\circ$$

$$\angle I \cong 57^\circ$$