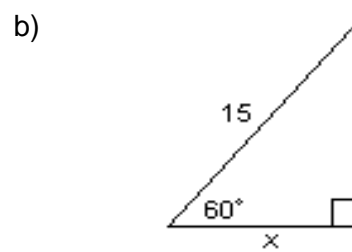
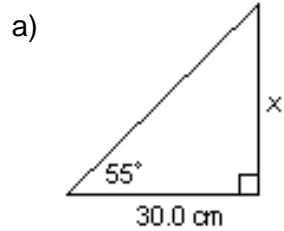


Primary Trig Ratio Quiz**KNOWLEDGE / UNDERSTANDING:**

LEVEL _____

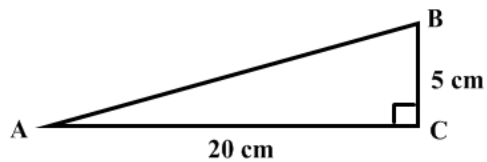
(Round each side to one decimal place and each angle to the nearest degree.)

1. Calculate the measure of the unknown side in each triangle, using trig ratios.



2. Calculate each angle indicated.

- a) Find $\angle A$.



- b) Find $\angle L$.

