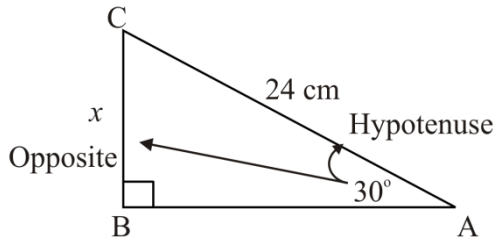
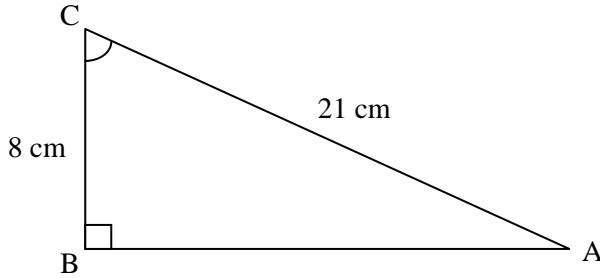


Practice with SOH CAH TOA

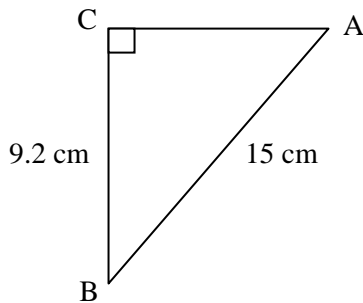
1. Decide whether to use sine, cosine, tangent, or the Pythagorean relationship to find x . Solve for x .



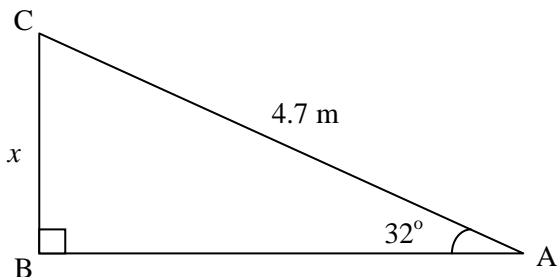
2. Decide whether to use sine, cosine, tangent, or the Pythagorean relationship to find $\angle C$. Solve for $\angle C$.



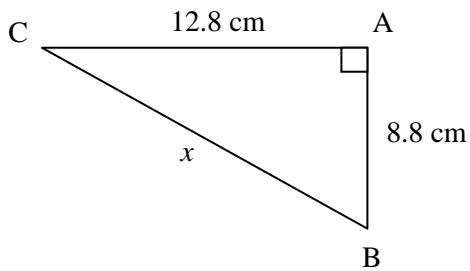
3. Decide whether to use sine, cosine, tangent, or the Pythagorean relationship to find b . Solve for b .



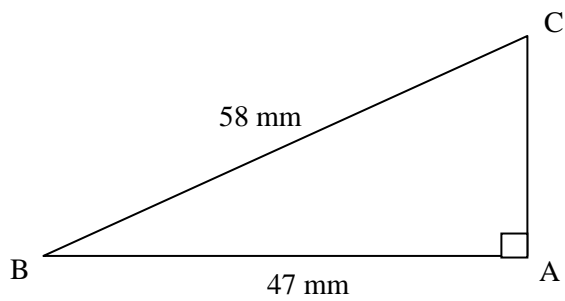
4. Decide whether to use sine, cosine, tangent, or the Pythagorean relationship to find x . Solve for x .



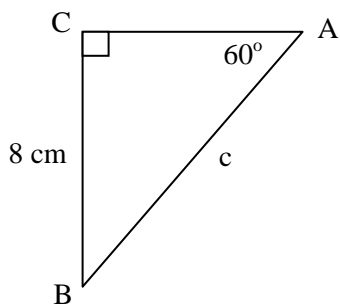
5. Decide whether to use sine, cosine, tangent, or the Pythagorean relationship to find x . Solve for x .



6. Decide whether to use sine, cosine, tangent, or the Pythagorean relationship to find $\angle B$. Solve for $\angle B$.



7. Solve for c .



8. Solve for $\angle A$.

